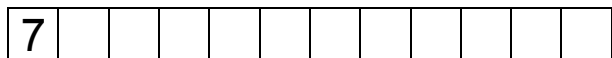

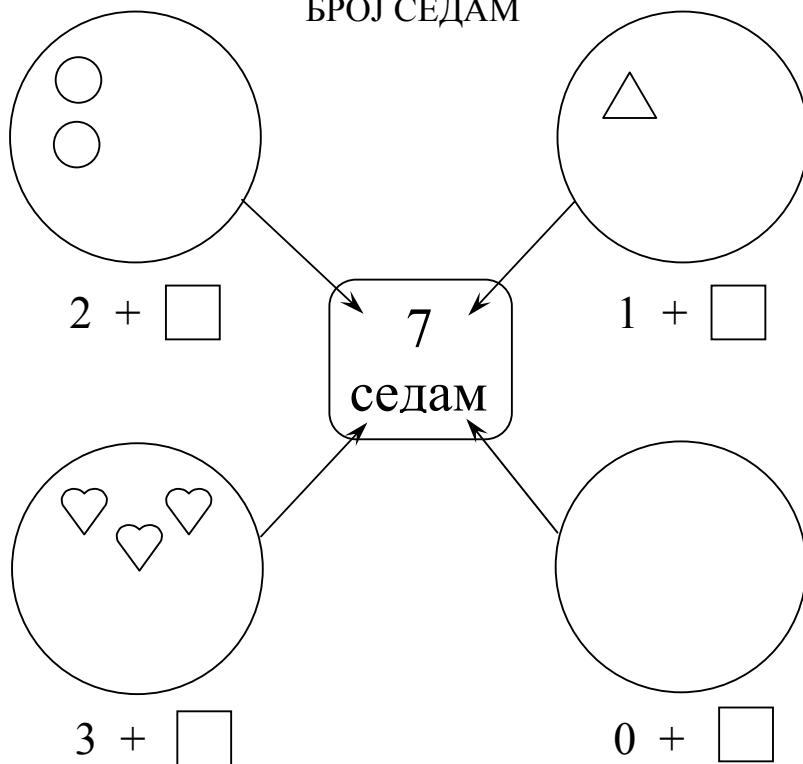


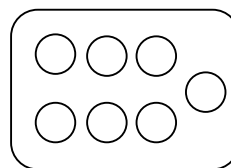
БРОЈ СЕДАМ



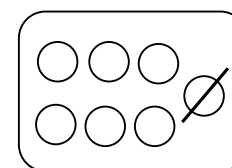
Упиши знак  $>$ ,  $<$  или  $=$ .

$5 + 1$    $1 + 6$      $7$    $3 + 4$      $5 + 2$    $6$

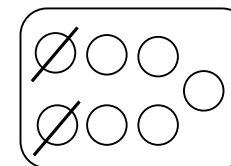
$2 + 4$    $3 + 2$      $4$    $0 + 7$      $3 + 3$    $6$



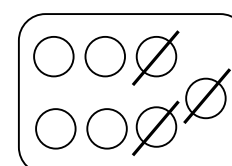
$7 - 0 = \underline{\quad}$



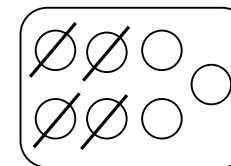
$\underline{\quad}$



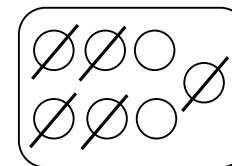
$\underline{\quad}$



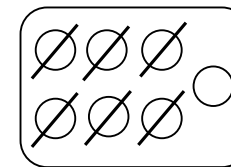
$\underline{\quad}$



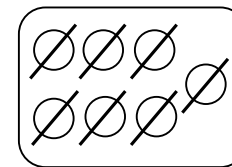
$\underline{\quad}$



$\underline{\quad}$



$\underline{\quad}$



$\underline{\quad}$

Израчунај:  $2 + 3 = \underline{\quad}$      $5 - 4 = \underline{\quad}$      $5 + 1 = \underline{\quad}$

$7 - 1 = \underline{\quad}$      $2 + 5 = \underline{\quad}$      $6 - 3 = \underline{\quad}$      $7 - 2 = \underline{\quad}$