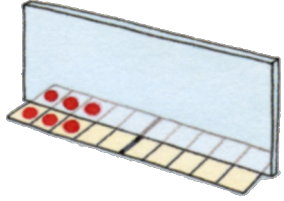


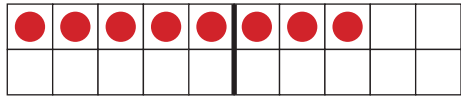
Вежба 17

име и презиме _____

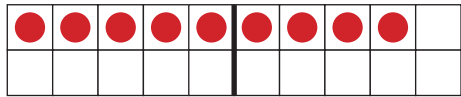
Доцртај исти број кружића у другом реду, па рачунај збирове једнаких сабирака.



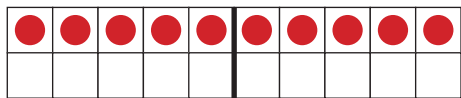
$$3 + 3 = 6$$




$$_ + _ = _$$



$$_ + _ = _$$



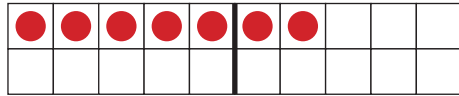
$$_ + _ = _$$



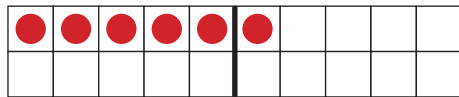
$$_ + _ = _$$



$$_ + _ = _$$



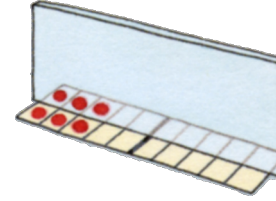
$$_ + _ = _$$



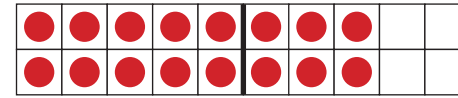
$$_ + _ = _$$

Решење 17


За сваки тачно решени задатак добијаш 1 поен.



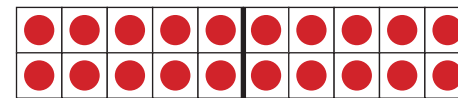
$$3 + 3 = 6$$



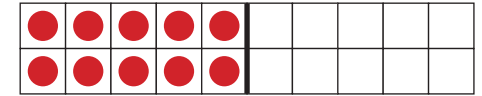
$$8 + 8 = 16$$



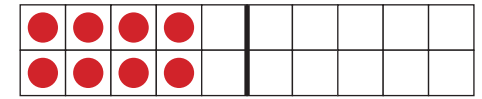
$$9 + 9 = 18$$



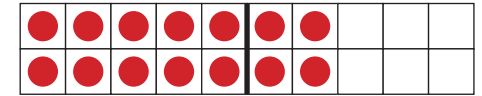
$$10 + 10 = 20$$



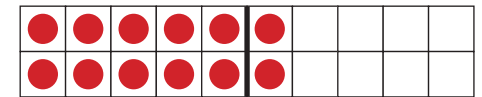
$$5 + 5 = 10$$




$$4 + 4 = 8$$



$$7 + 7 = 14$$



$$6 + 6 = 12$$



Бројеви до 20

Збирове једнаких сабирака

поена



Бројеви до 20

Збирове једнаких сабирака