





Вежба 7


име и презиме _____

Текст задатка: Посматрај слике и упиши колико има јабука.




Решење 7


За сваки тачно решени задатак освајаш 1 поен.




11



13




14



12

Важно!

$11 = 10 + 1$	$12 = 10 + 2$	$13 = 10 + 3$	$14 = 10 + 4$
$15 = 10 + 5$	$16 = 10 + 6$	$17 = 10 + 7$	$18 = 10 + 8$
$19 = 10 + 9$	$20 = 10 + 10$		



Бројеви до 20
Писање бројева

поена



Бројеви до 20
Писање бројева