

ЗНАК ПЛУС, +

1. Посматрај слике и записуј збирове.



$1 + 2$



$_ + _$



$_ + _$

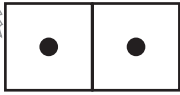


$_ + _$

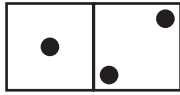


$_ + _$

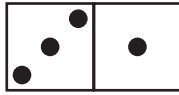
2.



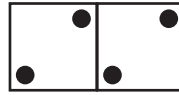
$1 + 1$



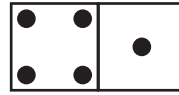
$_ + _$



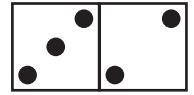
$_ + _$



$_ + _$



$_ + _$



$_ + _$

3.

● ● ● ○ ○	$_ + _$
● ○ ○ ○ ○	$_ + _$
● ● ○ ○ ○	$_ + _$
● ○ ○ ○	$_ + _$
● ○ ●	$_ + _$

4.

	$_ + _$		$_ + _$		$_ + _$
--	-----------	--	-----------	--	-----------



ЗНАК ПЛУС, + (решење)

1. Посматрај слике и записуј збирове.



$1 + 2$



$3 + 1$



$1 + 3$

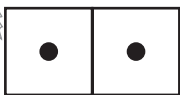


$2 + 2$

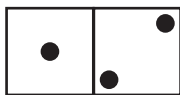


$3 + 2$

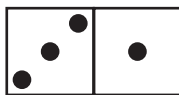
2.



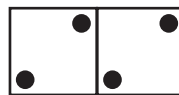
$1 + 1$



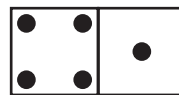
$1 + 2$



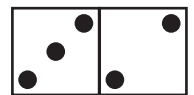
$3 + 1$



$2 + 2$



$4 + 1$



$3 + 2$

3.

● ● ● ○ ○	$3 + 2$
● ○ ○ ○ ○	$1 + 4$
● ● ○ ○ ○	$2 + 3$
● ○ ○ ○	$1 + 3$
● ○ ●	$2 + 1$

4.

	$1 + 3$		$2 + 2$		$2 + 2$
--	---------	--	---------	--	---------