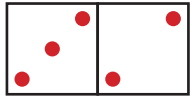



Вежба 5

име и презиме _____

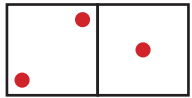
Посматрај слике и записуј збирове.




$$3 + 2 = 5$$



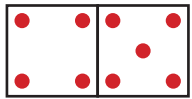
$$__ + __ = __$$




$$__ + __ = __$$



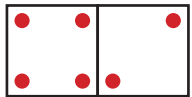
$$__ + __ = __$$




$$__ + __ = __$$



$$__ + __ = __$$




$$__ + __ = __$$



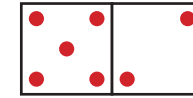
$$__ + __ = __$$

Решење 5

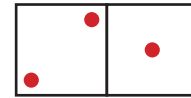
За сваки тачно решени задатак добијаш 1 поен.



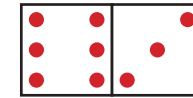
$$3 + 2 = 5$$




$$5 + 2 = 7$$



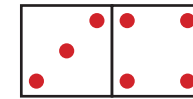
$$2 + 1 = 3$$




$$6 + 3 = 9$$



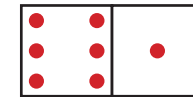
$$4 + 5 = 9$$




$$3 + 4 = 7$$



$$4 + 2 = 6$$



$$6 + 1 = 7$$



Бројеви до 10

Пишемо и рачунамо збирове

поена



Бројеви до 10

Пишемо и рачунамо збирове