










ЗНАК МИНУС, -

1. Посматрај слике и записуј разлике.

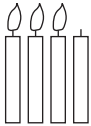

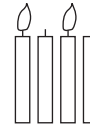

a)  $4 - 1$  $\underline{\quad} - \underline{\quad}$  $\underline{\quad} - \underline{\quad}$  $\underline{\quad} - \underline{\quad}$





б)  $3 - 1$  $\underline{\quad} - \underline{\quad}$  $\underline{\quad} - \underline{\quad}$  $\underline{\quad} - \underline{\quad}$






в)  $5 - 2$  $\underline{\quad} - \underline{\quad}$  $\underline{\quad} - \underline{\quad}$  $\underline{\quad} - \underline{\quad}$  $\underline{\quad} - \underline{\quad}$

ЗНАК МИНУС, - (решење)

1. Посматрај слике и записуј разлике.

a)  $4 - 1$  $5 - 2$  $4 - 2$  $5 - 1$

б)  $3 - 1$  $4 - 1$  $4 - 1$  $3 - 2$

в)  $5 - 2$  $4 - 2$  $5 - 2$  $5 - 1$  $5 - 2$